

9.1 Sequences

- List the terms of a sequence.
- Determine whether a sequence converges or diverges.
- Write a formula for the n th term of a sequence.
- Use properties of monotonic sequences and bounded sequences.

Exploration

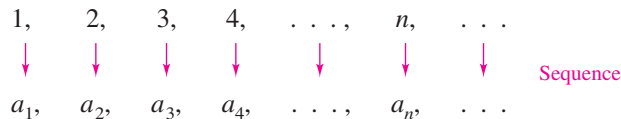
Finding Patterns Describe a pattern for each of the sequences listed below. Then use your description to write a formula for the n th term of each sequence. As n increases, do the terms appear to be approaching a limit? Explain your reasoning.

- a. $1, \frac{1}{2}, \frac{1}{4}, \frac{1}{8}, \frac{1}{16}, \dots$
- b. $1, \frac{1}{2}, \frac{1}{6}, \frac{1}{24}, \frac{1}{120}, \dots$
- c. $10, \frac{10}{3}, \frac{10}{6}, \frac{10}{10}, \frac{10}{15}, \dots$
- d. $\frac{1}{4}, \frac{4}{9}, \frac{9}{16}, \frac{16}{25}, \frac{25}{36}, \dots$
- e. $\frac{3}{7}, \frac{5}{10}, \frac{7}{13}, \frac{9}{16}, \frac{11}{19}, \dots$

Sequences

In mathematics, the word “sequence” is used in much the same way as it is in ordinary English. Saying that a collection of objects or events is *in sequence* usually means that the collection is ordered in such a way that it has an identified first member, second member, third member, and so on.

Mathematically, a **sequence** is defined as a function whose domain is the set of positive integers. Although a sequence is a function, it is common to represent sequences by subscript notation rather than by the standard function notation. For instance, in the sequence



1 is mapped onto a_1 , 2 is mapped onto a_2 , and so on. The numbers

$$a_1, a_2, a_3, \dots, a_n, \dots$$

are the **terms** of the sequence. The number a_n is the **n th term** of the sequence, and the entire sequence is denoted by $\{a_n\}$. Occasionally, it is convenient to begin a sequence with a_0 , so that the terms of the sequence become $a_0, a_1, a_2, a_3, \dots, a_n, \dots$ and the domain is the set of nonnegative integers.

EXAMPLE 1 Listing the Terms of a Sequence

a. The terms of the sequence $\{a_n\} = \{3 + (-1)^n\}$ are

$$3 + (-1)^1, 3 + (-1)^2, 3 + (-1)^3, 3 + (-1)^4, \dots$$

$$2, \quad 4, \quad 2, \quad 4, \quad \dots$$

b. The terms of the sequence $\{b_n\} = \left\{ \frac{n}{1 - 2n} \right\}$ are

$$\frac{1}{1 - 2 \cdot 1}, \frac{2}{1 - 2 \cdot 2}, \frac{3}{1 - 2 \cdot 3}, \frac{4}{1 - 2 \cdot 4}, \dots$$

$$-1, \quad -\frac{2}{3}, \quad -\frac{3}{5}, \quad -\frac{4}{7}, \quad \dots$$

c. The terms of the sequence $\{c_n\} = \left\{ \frac{n^2}{2^n - 1} \right\}$ are

$$\frac{1^2}{2^1 - 1}, \frac{2^2}{2^2 - 1}, \frac{3^2}{2^3 - 1}, \frac{4^2}{2^4 - 1}, \dots$$

$$\frac{1}{1}, \quad \frac{4}{3}, \quad \frac{9}{7}, \quad \frac{16}{15}, \quad \dots$$

d. The terms of the **recursively defined** sequence $\{d_n\}$, where $d_1 = 25$ and $d_{n+1} = d_n - 5$, are

$$25, \quad 25 - 5 = 20, \quad 20 - 5 = 15, \quad 15 - 5 = 10, \dots$$

• **REMARK** Some sequences are defined recursively. To define a sequence recursively, you need to be given one or more of the first few terms. All other terms of the sequence are then defined using previous terms, as shown in Example 1(d).

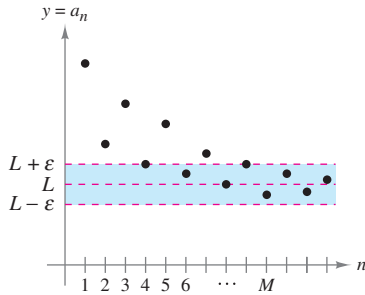


Limit of a Sequence

The primary focus of this chapter concerns sequences whose terms approach limiting values. Such sequences are said to **converge**. For instance, the sequence $\{1/2^n\}$

$$\frac{1}{2}, \frac{1}{4}, \frac{1}{8}, \frac{1}{16}, \frac{1}{32}, \dots$$

converges to 0, as indicated in the next definition.



For $n > M$, the terms of the sequence all lie within ϵ units of L .

Figure 9.1

Definition of the Limit of a Sequence

Let L be a real number. The **limit** of a sequence $\{a_n\}$ is L , written as

$$\lim_{n \rightarrow \infty} a_n = L$$

if for each $\epsilon > 0$, there exists $M > 0$ such that $|a_n - L| < \epsilon$ whenever $n > M$. If the limit L of a sequence exists, then the sequence **converges** to L . If the limit of a sequence does not exist, then the sequence **diverges**.

Graphically, this definition says that eventually (for $n > M$ and $\epsilon > 0$), the terms of a sequence that converges to L will lie within the band between the lines $y = L + \epsilon$ and $y = L - \epsilon$, as shown in Figure 9.1.

If a sequence $\{a_n\}$ agrees with a function f at every positive integer, and if $f(x)$ approaches a limit L as $x \rightarrow \infty$, then the sequence must converge to the same limit L .

••••• **REMARK** The converse of Theorem 9.1 is not true (see Exercise 84).

THEOREM 9.1 Limit of a Sequence

Let L be a real number. Let f be a function of a real variable such that

$$\lim_{x \rightarrow \infty} f(x) = L.$$

If $\{a_n\}$ is a sequence such that $f(n) = a_n$ for every positive integer n , then

$$\lim_{n \rightarrow \infty} a_n = L.$$

EXAMPLE 2 Finding the Limit of a Sequence

Find the limit of the sequence whose n th term is $a_n = \left(1 + \frac{1}{n}\right)^n$.

Solution In Theorem 5.15, you learned that

$$\lim_{x \rightarrow \infty} \left(1 + \frac{1}{x}\right)^x = e.$$

So, you can apply Theorem 9.1 to conclude that

$$\lim_{n \rightarrow \infty} a_n = \lim_{n \rightarrow \infty} \left(1 + \frac{1}{n}\right)^n = e.$$

There are different ways in which a sequence can fail to have a limit. One way is that the terms of the sequence increase without bound or decrease without bound. These cases are written symbolically, as shown below.

Terms increase without bound: $\lim_{n \rightarrow \infty} a_n = \infty$

Terms decrease without bound: $\lim_{n \rightarrow \infty} a_n = -\infty$

The properties of limits of sequences listed in the next theorem parallel those given for limits of functions of a real variable in Section 1.3.

THEOREM 9.2 Properties of Limits of Sequences

Let $\lim_{n \rightarrow \infty} a_n = L$ and $\lim_{n \rightarrow \infty} b_n = K$.

1. $\lim_{n \rightarrow \infty} (a_n \pm b_n) = L \pm K$
2. $\lim_{n \rightarrow \infty} ca_n = cL$, c is any real number.
3. $\lim_{n \rightarrow \infty} (a_n b_n) = LK$
4. $\lim_{n \rightarrow \infty} \frac{a_n}{b_n} = \frac{L}{K}$, $b_n \neq 0$ and $K \neq 0$

EXAMPLE 3 Determining Convergence or Divergence

•••▶ See [LarsonCalculus.com](#) for an interactive version of this type of example.

- a. Because the sequence $\{a_n\} = \{3 + (-1)^n\}$ has terms

$$2, 4, 2, 4, \dots$$

See Example 1(a), page 584.

that alternate between 2 and 4, the limit

$$\lim_{n \rightarrow \infty} a_n$$

does not exist. So, the sequence diverges.

- b. For $\{b_n\} = \left\{ \frac{n}{1 - 2n} \right\}$, divide the numerator and denominator by n to obtain

$$\lim_{n \rightarrow \infty} \frac{n}{1 - 2n} = \lim_{n \rightarrow \infty} \frac{1}{(1/n) - 2} = -\frac{1}{2}$$

See Example 1(b), page 584.

which implies that the sequence converges to $-\frac{1}{2}$.

EXAMPLE 4 Using L'Hôpital's Rule to Determine Convergence

Show that the sequence whose n th term is $a_n = \frac{n^2}{2^n - 1}$ converges.

Solution Consider the function of a real variable

$$f(x) = \frac{x^2}{2^x - 1}.$$

Applying L'Hôpital's Rule twice produces

$$\lim_{x \rightarrow \infty} \frac{x^2}{2^x - 1} = \lim_{x \rightarrow \infty} \frac{2x}{(\ln 2)2^x} = \lim_{x \rightarrow \infty} \frac{2}{(\ln 2)^2 2^x} = 0.$$

Because $f(n) = a_n$ for every positive integer, you can apply Theorem 9.1 to conclude that

$$\lim_{n \rightarrow \infty} \frac{n^2}{2^n - 1} = 0.$$

See Example 1(c), page 584.

So, the sequence converges to 0. ■

▶ **TECHNOLOGY** Use a graphing utility to graph the function in Example 4. Notice that as x approaches infinity, the value of the function gets closer and closer to 0. If you have access to a graphing utility that can generate terms of a sequence, try using it to calculate the first 20 terms of the sequence in Example 4. Then view the terms to observe numerically that the sequence converges to 0.

The symbol $n!$ (read “ n factorial”) is used to simplify some of the formulas developed in this chapter. Let n be a positive integer; then **n factorial** is defined as

$$n! = 1 \cdot 2 \cdot 3 \cdot 4 \cdot \cdots \cdot (n - 1) \cdot n.$$

As a special case, **zero factorial** is defined as $0! = 1$. From this definition, you can see that $1! = 1$, $2! = 1 \cdot 2 = 2$, $3! = 1 \cdot 2 \cdot 3 = 6$, and so on. Factorials follow the same conventions for order of operations as exponents. That is, just as $2x^3$ and $(2x)^3$ imply different orders of operations, $2n!$ and $(2n)!$ imply the orders

$$2n! = 2(n!) = 2(1 \cdot 2 \cdot 3 \cdot 4 \cdot \cdots \cdot n)$$

and

$$(2n)! = 1 \cdot 2 \cdot 3 \cdot 4 \cdot \cdots \cdot n \cdot (n + 1) \cdot \cdots \cdot 2n$$

respectively.

Another useful limit theorem that can be rewritten for sequences is the Squeeze Theorem from Section 1.3.

THEOREM 9.3 Squeeze Theorem for Sequences

If $\lim_{n \rightarrow \infty} a_n = L = \lim_{n \rightarrow \infty} b_n$ and there exists an integer N such that $a_n \leq c_n \leq b_n$ for all $n > N$, then $\lim_{n \rightarrow \infty} c_n = L$.

EXAMPLE 5 Using the Squeeze Theorem

Show that the sequence $\{c_n\} = \left\{(-1)^n \frac{1}{n!}\right\}$ converges, and find its limit.

Solution To apply the Squeeze Theorem, you must find two convergent sequences that can be related to $\{c_n\}$. Two possibilities are $a_n = -1/2^n$ and $b_n = 1/2^n$, both of which converge to 0. By comparing the term $n!$ with 2^n , you can see that

$$n! = 1 \cdot 2 \cdot 3 \cdot 4 \cdot 5 \cdot 6 \cdot \cdots \cdot n = 24 \cdot \underbrace{5 \cdot 6 \cdot \cdots \cdot n}_{n - 4 \text{ factors}} \quad (n \geq 4)$$

and

$$2^n = 2 \cdot 2 \cdot 2 \cdot 2 \cdot 2 \cdot 2 \cdot \cdots \cdot 2 = 16 \cdot \underbrace{2 \cdot 2 \cdot \cdots \cdot 2}_{n - 4 \text{ factors}} \quad (n \geq 4)$$

This implies that for $n \geq 4$, $2^n < n!$, and you have

$$\frac{-1}{2^n} \leq (-1)^n \frac{1}{n!} \leq \frac{1}{2^n}, \quad n \geq 4$$

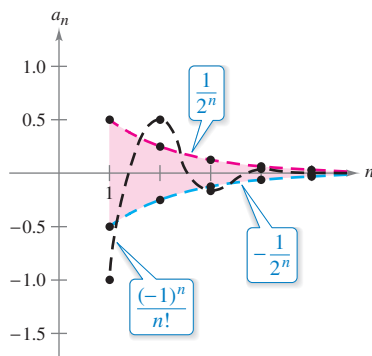
as shown in Figure 9.2. So, by the Squeeze Theorem, it follows that

$$\lim_{n \rightarrow \infty} (-1)^n \frac{1}{n!} = 0.$$

Example 5 suggests something about the rate at which $n!$ increases as $n \rightarrow \infty$. As Figure 9.2 suggests, both $1/2^n$ and $1/n!$ approach 0 as $n \rightarrow \infty$. Yet $1/n!$ approaches 0 so much faster than $1/2^n$ does that

$$\lim_{n \rightarrow \infty} \frac{1/n!}{1/2^n} = \lim_{n \rightarrow \infty} \frac{2^n}{n!} = 0.$$

In fact, it can be shown that for any fixed number k , $\lim_{n \rightarrow \infty} (k^n/n!) = 0$. This means that *the factorial function grows faster than any exponential function*.



For $n \geq 4$, $(-1)^n/n!$ is squeezed between $-1/2^n$ and $1/2^n$.

Figure 9.2

In Example 5, the sequence $\{c_n\}$ has both positive and negative terms. For this sequence, it happens that the sequence of absolute values, $\{|c_n|\}$, also converges to 0. You can show this by the Squeeze Theorem using the inequality

$$0 \leq \frac{1}{n!} \leq \frac{1}{2^n}, \quad n \geq 4.$$

In such cases, it is often convenient to consider the sequence of absolute values—and then apply Theorem 9.4, which states that if the absolute value sequence converges to 0, then the original signed sequence also converges to 0.

THEOREM 9.4 Absolute Value Theorem

For the sequence $\{a_n\}$, if

$$\lim_{n \rightarrow \infty} |a_n| = 0 \quad \text{then} \quad \lim_{n \rightarrow \infty} a_n = 0.$$

Proof Consider the two sequences $\{|a_n|\}$ and $\{-|a_n|\}$. Because both of these sequences converge to 0 and

$$-|a_n| \leq a_n \leq |a_n|$$

you can use the Squeeze Theorem to conclude that $\{a_n\}$ converges to 0.

See *LarsonCalculus.com* for Bruce Edwards's video of this proof. 

Pattern Recognition for Sequences

Sometimes the terms of a sequence are generated by some rule that does not explicitly identify the n th term of the sequence. In such cases, you may be required to discover a *pattern* in the sequence and to describe the n th term. Once the n th term has been specified, you can investigate the convergence or divergence of the sequence.

EXAMPLE 6 Finding the n th Term of a Sequence

Find a sequence $\{a_n\}$ whose first five terms are

$$\frac{2}{1}, \frac{4}{3}, \frac{8}{5}, \frac{16}{7}, \frac{32}{9}, \dots$$

and then determine whether the sequence you have chosen converges or diverges.

Solution First, note that the numerators are successive powers of 2, and the denominators form the sequence of positive odd integers. By comparing a_n with n , you have the following pattern.

$$\frac{2^1}{1}, \frac{2^2}{3}, \frac{2^3}{5}, \frac{2^4}{7}, \frac{2^5}{9}, \dots, \frac{2^n}{2n-1}, \dots$$

Consider the function of a real variable $f(x) = 2^x/(2x - 1)$. Applying L'Hôpital's Rule produces

$$\lim_{x \rightarrow \infty} \frac{2^x}{2x-1} = \lim_{x \rightarrow \infty} \frac{2^x(\ln 2)}{2} = \infty.$$

Next, apply Theorem 9.1 to conclude that

$$\lim_{n \rightarrow \infty} \frac{2^n}{2n-1} = \infty.$$

So, the sequence diverges. 

Without a specific rule for generating the terms of a sequence or some knowledge of the context in which the terms of the sequence are obtained, it is not possible to determine the convergence or divergence of the sequence merely from its first several terms. For instance, although the first three terms of the following four sequences are identical, the first two sequences converge to 0, the third sequence converges to $\frac{1}{9}$, and the fourth sequence diverges.

$$\{a_n\}: \frac{1}{2}, \frac{1}{4}, \frac{1}{8}, \frac{1}{16}, \dots, \frac{1}{2^n}, \dots$$

$$\{b_n\}: \frac{1}{2}, \frac{1}{4}, \frac{1}{8}, \frac{1}{15}, \dots, \frac{6}{(n+1)(n^2-n+6)}, \dots$$

$$\{c_n\}: \frac{1}{2}, \frac{1}{4}, \frac{1}{8}, \frac{7}{62}, \dots, \frac{n^2-3n+3}{9n^2-25n+18}, \dots$$

$$\{d_n\}: \frac{1}{2}, \frac{1}{4}, \frac{1}{8}, 0, \dots, \frac{-n(n+1)(n-4)}{6(n^2+3n-2)}, \dots$$

The process of determining an n th term from the pattern observed in the first several terms of a sequence is an example of *inductive reasoning*.

EXAMPLE 7 Finding the n th Term of a Sequence

Determine the n th term for a sequence whose first five terms are

$$-\frac{2}{1}, \frac{8}{2}, -\frac{26}{6}, \frac{80}{24}, -\frac{242}{120}, \dots$$

and then decide whether the sequence converges or diverges.

Solution Note that the numerators are 1 less than 3^n .

$$3^1 - 1 = 2 \quad 3^2 - 1 = 8 \quad 3^3 - 1 = 26 \quad 3^4 - 1 = 80 \quad 3^5 - 1 = 242$$

So, you can reason that the numerators are given by the rule

$$3^n - 1.$$

Factoring the denominators produces

$$1 = 1$$

$$2 = 1 \cdot 2$$

$$6 = 1 \cdot 2 \cdot 3$$

$$24 = 1 \cdot 2 \cdot 3 \cdot 4$$

and

$$120 = 1 \cdot 2 \cdot 3 \cdot 4 \cdot 5.$$

This suggests that the denominators are represented by $n!$. Finally, because the signs alternate, you can write the n th term as


$$a_n = (-1)^n \left(\frac{3^n - 1}{n!} \right).$$

From the discussion about the growth of $n!$, it follows that

$$\lim_{n \rightarrow \infty} |a_n| = \lim_{n \rightarrow \infty} \frac{3^n - 1}{n!} = 0.$$

Applying Theorem 9.4, you can conclude that

$$\lim_{n \rightarrow \infty} a_n = 0.$$

So, the sequence $\{a_n\}$ converges to 0. 

Monotonic Sequences and Bounded Sequences

So far, you have determined the convergence of a sequence by finding its limit. Even when you cannot determine the limit of a particular sequence, it still may be useful to know whether the sequence converges. Theorem 9.5 (on the next page) provides a test for convergence of sequences without determining the limit. First, some preliminary definitions are given.

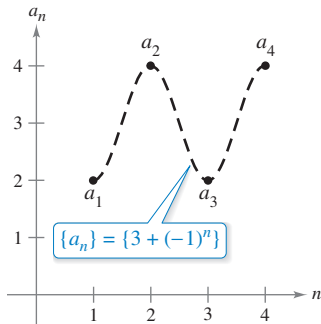
Definition of Monotonic Sequence

A sequence $\{a_n\}$ is **monotonic** when its terms are nondecreasing

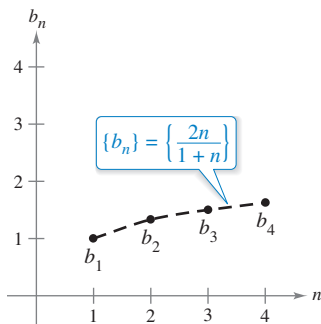
$$a_1 \leq a_2 \leq a_3 \leq \dots \leq a_n \leq \dots$$

or when its terms are nonincreasing

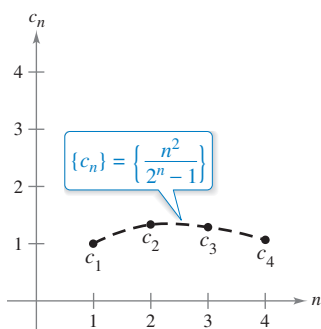
$$a_1 \geq a_2 \geq a_3 \geq \dots \geq a_n \geq \dots$$



(a) Not monotonic



(b) Monotonic



(c) Not monotonic

Figure 9.3

EXAMPLE 8 Determining Whether a Sequence Is Monotonic

Determine whether each sequence having the given n th term is monotonic.

a. $a_n = 3 + (-1)^n$

b. $b_n = \frac{2n}{1 + n}$

c. $c_n = \frac{n^2}{2^n - 1}$

Solution

a. This sequence alternates between 2 and 4. So, it is not monotonic.

b. This sequence is monotonic because each successive term is greater than its predecessor. To see this, compare the terms b_n and b_{n+1} . [Note that, because n is positive, you can multiply each side of the inequality by $(1 + n)$ and $(2 + n)$ without reversing the inequality sign.]

$$\begin{aligned} b_n &= \frac{2n}{1 + n} \stackrel{?}{<} \frac{2(n + 1)}{1 + (n + 1)} = b_{n+1} \\ 2n(2 + n) &\stackrel{?}{<} (1 + n)(2n + 2) \\ 4n + 2n^2 &\stackrel{?}{<} 2 + 4n + 2n^2 \\ 0 &< 2 \end{aligned}$$

Starting with the final inequality, which is valid, you can reverse the steps to conclude that the original inequality is also valid.

c. This sequence is not monotonic, because the second term is greater than the first term, and greater than the third. (Note that when you drop the first term, the remaining sequence c_2, c_3, c_4, \dots is monotonic.)

Figure 9.3 graphically illustrates these three sequences. ■

In Example 8(b), another way to see that the sequence is monotonic is to argue that the derivative of the corresponding differentiable function

$$f(x) = \frac{2x}{1 + x}$$

is positive for all x . This implies that f is increasing, which in turn implies that $\{b_n\}$ is increasing.

Definition of Bounded Sequence

1. A sequence $\{a_n\}$ is **bounded above** when there is a real number M such that $a_n \leq M$ for all n . The number M is called an **upper bound** of the sequence.
2. A sequence $\{a_n\}$ is **bounded below** when there is a real number N such that $N \leq a_n$ for all n . The number N is called a **lower bound** of the sequence.
3. A sequence $\{a_n\}$ is **bounded** when it is bounded above and bounded below.

Note that all three sequences in Example 3 (and shown in Figure 9.3) are bounded. To see this, note that

$$2 \leq a_n \leq 4, \quad 1 \leq b_n \leq 2, \quad \text{and} \quad 0 \leq c_n \leq \frac{4}{3}.$$

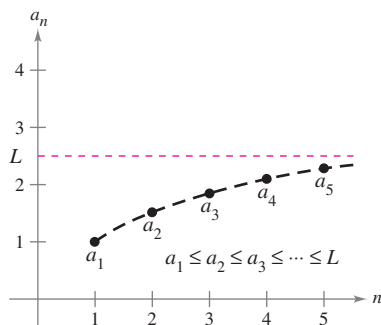
One important property of the real numbers is that they are **complete**. Informally, this means that there are no holes or gaps on the real number line. (The set of rational numbers does not have the completeness property.) The completeness axiom for real numbers can be used to conclude that if a sequence has an upper bound, then it must have a **least upper bound** (an upper bound that is less than all other upper bounds for the sequence). For example, the least upper bound of the sequence $\{a_n\} = \{n/(n+1)\}$,

$$\frac{1}{2}, \frac{2}{3}, \frac{3}{4}, \frac{4}{5}, \dots, \frac{n}{n+1}, \dots$$

is 1. The completeness axiom is used in the proof of Theorem 9.5.

THEOREM 9.5 Bounded Monotonic Sequences

If a sequence $\{a_n\}$ is bounded and monotonic, then it converges.



Every bounded, nondecreasing sequence converges.

Figure 9.4

Proof Assume that the sequence is nondecreasing, as shown in Figure 9.4. For the sake of simplicity, also assume that each term in the sequence is positive. Because the sequence is bounded, there must exist an upper bound M such that

$$a_1 \leq a_2 \leq a_3 \leq \dots \leq a_n \leq \dots \leq M.$$


From the completeness axiom, it follows that there is a least upper bound L such that

$$a_1 \leq a_2 \leq a_3 \leq \dots \leq a_n \leq \dots \leq L.$$

For $\varepsilon > 0$, it follows that $L - \varepsilon < L$, and therefore $L - \varepsilon$ cannot be an upper bound for the sequence. Consequently, at least one term of $\{a_n\}$ is greater than $L - \varepsilon$. That is, $L - \varepsilon < a_N$ for some positive integer N . Because the terms of $\{a_n\}$ are nondecreasing, it follows that $a_N \leq a_n$ for $n > N$. You now know that $L - \varepsilon < a_N \leq a_n \leq L < L + \varepsilon$, for every $n > N$. It follows that $|a_n - L| < \varepsilon$ for $n > N$, which by definition means that $\{a_n\}$ converges to L . The proof for a nonincreasing sequence is similar (see Exercise 91).

See LarsonCalculus.com for Bruce Edwards's video of this proof. 

EXAMPLE 9 Bounded and Monotonic Sequences

- a. The sequence $\{a_n\} = \{1/n\}$ is both bounded and monotonic, and so, by Theorem 9.5, it must converge.
- b. The divergent sequence $\{b_n\} = \{n^2/(n+1)\}$ is monotonic, but not bounded. (It is bounded below.)
- c. The divergent sequence $\{c_n\} = \{(-1)^n\}$ is bounded, but not monotonic. 

9.1 Exercises

See CalcChat.com for tutorial help and worked-out solutions to odd-numbered exercises.

Listing the Terms of a Sequence In Exercises 1–6, write the first five terms of the sequence.

1. $a_n = 3^n$

2. $a_n = \left(-\frac{2}{5}\right)^n$

3. $a_n = \sin \frac{n\pi}{2}$

4. $a_n = \frac{3n}{n+4}$

5. $a_n = (-1)^{n+1} \left(\frac{2}{n}\right)$

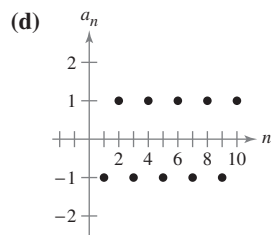
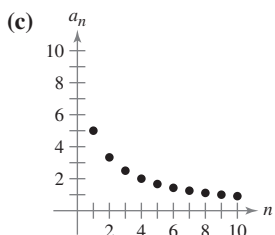
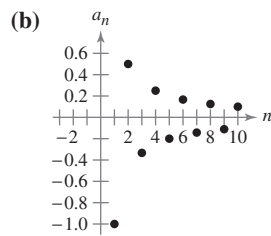
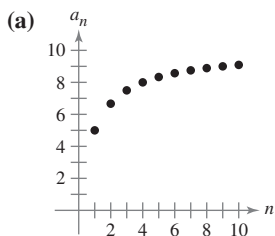
6. $a_n = 2 + \frac{2}{n} - \frac{1}{n^2}$

Listing the Terms of a Sequence In Exercises 7 and 8, write the first five terms of the recursively defined sequence.

7. $a_1 = 3, a_{k+1} = 2(a_k - 1)$

8. $a_1 = 6, a_{k+1} = \frac{1}{3}a_k^2$

Matching In Exercises 9–12, match the sequence with its graph. [The graphs are labeled (a), (b), (c), and (d).]



9. $a_n = \frac{10}{n+1}$

10. $a_n = \frac{10n}{n+1}$

11. $a_n = (-1)^n$

12. $a_n = \frac{(-1)^n}{n}$

Writing Terms In Exercises 13–16, write the next two apparent terms of the sequence. Describe the pattern you used to find these terms.

13. 2, 5, 8, 11, . . .

14. 8, 13, 18, 23, 28, . . .

15. 5, 10, 20, 40, . . .

16. $6, -2, \frac{2}{3}, -\frac{2}{9}, \dots$

Simplifying Factorials In Exercises 17–20, simplify the ratio of factorials.

17. $\frac{(n+1)!}{n!}$

18. $\frac{n!}{(n+2)!}$

19. $\frac{(2n-1)!}{(2n+1)!}$

20. $\frac{(2n+2)!}{(2n)!}$

Finding the Limit of a Sequence In Exercises 21–24, find the limit (if possible) of the sequence.

21. $a_n = \frac{5n^2}{n^2+2}$

22. $a_n = 6 + \frac{2}{n^2}$

23. $a_n = \frac{2n}{\sqrt{n^2+1}}$

24. $a_n = \cos \frac{2}{n}$



Finding the Limit of a Sequence In Exercises 25–28, use a graphing utility to graph the first 10 terms of the sequence. Use the graph to make an inference about the convergence or divergence of the sequence. Verify your inference analytically and, if the sequence converges, find its limit.

25. $a_n = \frac{4n+1}{n}$

26. $a_n = \frac{1}{n^{3/2}}$

27. $a_n = \sin \frac{n\pi}{2}$

28. $a_n = 2 - \frac{1}{4^n}$

Determining Convergence or Divergence In Exercises 29–44, determine the convergence or divergence of the sequence with the given n th term. If the sequence converges, find its limit.

29. $a_n = \frac{5}{n+2}$

30. $a_n = 8 + \frac{5}{n}$

31. $a_n = (-1)^n \left(\frac{n}{n+1}\right)$

32. $a_n = \frac{1+(-1)^n}{n^2}$

33. $a_n = \frac{10n^2+3n+7}{2n^2-6}$

34. $a_n = \frac{\sqrt[3]{n}}{\sqrt[3]{n+1}}$

35. $a_n = \frac{\ln(n^3)}{2n}$

36. $a_n = \frac{5^n}{3^n}$

37. $a_n = \frac{(n+1)!}{n!}$

38. $a_n = \frac{(n-2)!}{n!}$

39. $a_n = \frac{n^p}{e^n}, p > 0$

40. $a_n = n \sin \frac{1}{n}$

41. $a_n = 2^{1/n}$

42. $a_n = -3^{-n}$

43. $a_n = \frac{\sin n}{n}$

44. $a_n = \frac{\cos \pi n}{n^2}$

Finding the n th Term of a Sequence In Exercises 45–52, write an expression for the n th term of the sequence. (There is more than one correct answer.)

45. 2, 8, 14, 20, . . .

46. $1, \frac{1}{2}, \frac{1}{6}, \frac{1}{24}, \frac{1}{120}, \dots$

47. -2, 1, 6, 13, 22, . . .

48. $1, -\frac{1}{4}, \frac{1}{9}, -\frac{1}{16}, \dots$

49. $\frac{2}{3}, \frac{3}{4}, \frac{4}{5}, \frac{5}{6}, \dots$


50. 2, 24, 720, 40,320, 3,628,800, . . .

51. $2, 1 + \frac{1}{2}, 1 + \frac{1}{3}, 1 + \frac{1}{4}, 1 + \frac{1}{5}, \dots$

52. $\frac{1}{2 \cdot 3}, \frac{2}{3 \cdot 4}, \frac{3}{4 \cdot 5}, \frac{4}{5 \cdot 6}, \dots$

Finding Monotonic and Bounded Sequences In Exercises 53–60, determine whether the sequence with the given n th term is monotonic and whether it is bounded. Use a graphing utility to confirm your results.

- 53. $a_n = 4 - \frac{1}{n}$
- 54. $a_n = \frac{3n}{n+2}$
- 55. $a_n = ne^{-n/2}$
- 56. $a_n = \left(-\frac{2}{3}\right)^n$
- 57. $a_n = \left(\frac{2}{3}\right)^n$
- 58. $a_n = \left(\frac{3}{2}\right)^n$
- 59. $a_n = \sin \frac{n\pi}{6}$
- 60. $a_n = \frac{\cos n}{n}$

 **Using a Theorem** In Exercises 61–64, (a) use Theorem 9.5 to show that the sequence with the given n th term converges, and (b) use a graphing utility to graph the first 10 terms of the sequence and find its limit.

- 61. $a_n = 7 + \frac{1}{n}$
- 62. $a_n = 5 - \frac{2}{n}$
- 63. $a_n = \frac{1}{3}\left(1 - \frac{1}{3^n}\right)$
- 64. $a_n = 2 + \frac{1}{5^n}$

- 65. **Increasing Sequence** Let $\{a_n\}$ be an increasing sequence such that $2 \leq a_n \leq 4$. Explain why $\{a_n\}$ has a limit. What can you conclude about the limit?
- 66. **Monotonic Sequence** Let $\{a_n\}$ be a monotonic sequence such that $a_n \leq 1$. Discuss the convergence of $\{a_n\}$. When $\{a_n\}$ converges, what can you conclude about its limit?

••• **67. Compound Interest** •••••

Consider the sequence $\{A_n\}$ whose n th term is given by

$$A_n = P\left(1 + \frac{r}{12}\right)^n$$

where P is the principal, A_n is the account balance after n months, and r is the interest rate compounded annually.

- (a) Is $\{A_n\}$ a convergent sequence? Explain.
- (b) Find the first 10 terms of the sequence when $P = \$10,000$ and $r = 0.055$.



68. Compound Interest A deposit of \$100 is made in an account at the beginning of each month at an annual interest rate of 3% compounded monthly. The balance in the account after n months is $A_n = 100(401)(1.0025^n - 1)$.

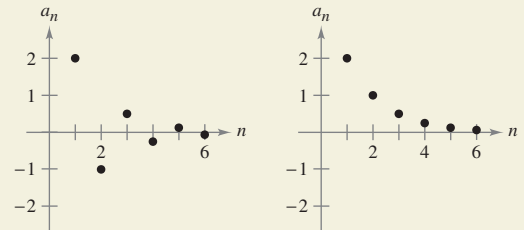
- (a) Compute the first six terms of the sequence $\{A_n\}$.
- (b) Find the balance in the account after 5 years by computing the 60th term of the sequence.
- (c) Find the balance in the account after 20 years by computing the 240th term of the sequence.

WRITING ABOUT CONCEPTS

- 69. **Sequence** Is it possible for a sequence to converge to two different numbers? If so, give an example. If not, explain why not.
- 70. **Defining Terms** In your own words, define each of the following.
 - (a) Sequence
 - (b) Convergence of a sequence
 - (c) Monotonic sequence
 - (d) Bounded sequence
- 71. **Writing a Sequence** Give an example of a sequence satisfying the condition or explain why no such sequence exists. (Examples are not unique.)
 - (a) A monotonically increasing sequence that converges to 10
 - (b) A monotonically increasing bounded sequence that does not converge
 - (c) A sequence that converges to $\frac{3}{4}$
 - (d) An unbounded sequence that converges to 100



72. HOW DO YOU SEE IT? The graphs of two sequences are shown in the figures. Which graph represents the sequence with alternating signs? Explain.



73. Government Expenditures A government program that currently costs taxpayers \$4.5 billion per year is cut back by 20 percent per year.

- (a) Write an expression for the amount budgeted for this program after n years.
- (b) Compute the budgets for the first 4 years.
- (c) Determine the convergence or divergence of the sequence of reduced budgets. If the sequence converges, find its limit.

74. Inflation When the rate of inflation is $4\frac{1}{2}\%$ per year and the average price of a car is currently \$25,000, the average price after n years is $P_n = \$25,000(1.045)^n$. Compute the average prices for the next 5 years.

75. Using a Sequence Compute the first six terms of the sequence $\{a_n\} = \{\sqrt[n]{n}\}$. If the sequence converges, find its limit.

76. Using a Sequence Compute the first six terms of the sequence

$$\{a_n\} = \left\{ \left(1 + \frac{1}{n}\right)^n \right\}.$$

If the sequence converges, find its limit.

Lisa S./Shutterstock.com

77. **Proof** Prove that if $\{s_n\}$ converges to L and $L > 0$, then there exists a number N such that $s_n > 0$ for $n > N$.



78. **Modeling Data** The amounts of the federal debt a_n (in trillions of dollars) of the United States from 2000 through 2011 are given below as ordered pairs of the form (n, a_n) , where n represents the year, with $n = 0$ corresponding to 2000. (Source: U.S. Office of Management and Budget)

$(0, 5.6), (1, 5.8), (2, 6.2), (3, 6.8), (4, 7.4), (5, 7.9), (6, 8.5), (7, 9.0), (8, 10.0), (9, 11.9), (10, 13.5), (11, 14.8)$

(a) Use the regression capabilities of a graphing utility to find a model of the form

$$a_n = bn^2 + cn + d, \quad n = 0, 1, \dots, 11$$

for the data. Use the graphing utility to plot the points and graph the model.

(b) Use the model to predict the amount of the federal debt in the year 2020.

True or False? In Exercises 79–82, determine whether the statement is true or false. If it is false, explain why or give an example that shows it is false.

79. If $\{a_n\}$ converges to 3 and $\{b_n\}$ converges to 2, then $\{a_n + b_n\}$ converges to 5.

80. If $\{a_n\}$ converges, then $\lim_{n \rightarrow \infty} (a_n - a_{n+1}) = 0$.

81. If $\{a_n\}$ converges, then $\{a_n/n\}$ converges to 0.

82. If $\{a_n\}$ diverges and $\{b_n\}$ diverges, then $\{a_n + b_n\}$ diverges.

83. **Fibonacci Sequence** In a study of the progeny of rabbits, Fibonacci (ca. 1170–ca. 1240) encountered the sequence now bearing his name. The sequence is defined recursively as $a_{n+2} = a_n + a_{n+1}$, where $a_1 = 1$ and $a_2 = 1$.

(a) Write the first 12 terms of the sequence.

(b) Write the first 10 terms of the sequence defined by

$$b_n = \frac{a_{n+1}}{a_n}, \quad n \geq 1.$$

(c) Using the definition in part (b), show that

$$b_n = 1 + \frac{1}{b_{n-1}}.$$

(d) The **golden ratio** ρ can be defined by $\lim_{n \rightarrow \infty} b_n = \rho$. Show that

$$\rho = 1 + \frac{1}{\rho}$$

and solve this equation for ρ .

84. **Using a Theorem** Show that the converse of Theorem 9.1 is not true. [Hint: Find a function $f(x)$ such that $f(n) = a_n$ converges, but $\lim_{x \rightarrow \infty} f(x)$ does not exist.]

85. **Using a Sequence** Consider the sequence

$$\sqrt{2}, \sqrt{2 + \sqrt{2}}, \sqrt{2 + \sqrt{2 + \sqrt{2}}}, \dots$$

(a) Compute the first five terms of this sequence.

(b) Write a recursion formula for a_n , for $n \geq 2$.

(c) Find $\lim_{n \rightarrow \infty} a_n$.

86. **Using a Sequence** Consider the sequence $\{a_n\}$ where $a_1 = \sqrt{k}$, $a_{n+1} = \sqrt{k + a_n}$, and $k > 0$.

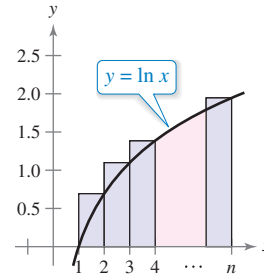
(a) Show that $\{a_n\}$ is increasing and bounded.

(b) Prove that $\lim_{n \rightarrow \infty} a_n$ exists.

(c) Find $\lim_{n \rightarrow \infty} a_n$.

87. **Squeeze Theorem**

(a) Show that $\int_1^n \ln x \, dx < \ln(n!)$ for $n \geq 2$.



(b) Draw a graph similar to the one above that shows

$$\ln(n!) < \int_1^{n+1} \ln x \, dx.$$

(c) Use the results of parts (a) and (b) to show that

$$\frac{n^n}{e^{n-1}} < n! < \frac{(n+1)^{n+1}}{e^n}, \quad \text{for } n > 1.$$

(d) Use the Squeeze Theorem for Sequences and the result of part (c) to show that $\lim_{n \rightarrow \infty} (n/n!) = 1/e$.

(e) Test the result of part (d) for $n = 20, 50$, and 100 .

88. **Proof** Prove, using the definition of the limit of a sequence, that

$$\lim_{n \rightarrow \infty} \frac{1}{n^3} = 0.$$

89. **Proof** Prove, using the definition of the limit of a sequence, that $\lim_{n \rightarrow \infty} r^n = 0$ for $-1 < r < 1$.

90. **Using a Sequence** Find a divergent sequence $\{a_n\}$ such that $\{a_{2n}\}$ converges.

91. **Proof** Prove Theorem 9.5 for a nonincreasing sequence.

PUTNAM EXAM CHALLENGE

92. Let $\{x_n\}$, $n \geq 0$, be a sequence of nonzero real numbers such that $x_n^2 - x_{n-1}x_{n+1} = 1$ for $n = 1, 2, 3, \dots$. Prove there exists a real number a such that $x_{n+1} = ax_n - x_{n-1}$ for all $n \geq 1$.

93. Let $T_0 = 2, T_1 = 3, T_2 = 6$, and for $n \geq 3$,

$$T_n = (n+4)T_{n-1} - 4nT_{n-2} + (4n-8)T_{n-3}.$$

The first few terms are

2, 3, 6, 14, 40, 152, 784, 5168, 40,576

Find, with proof, a formula for T_n of the form $T_n = A_n + B_n$, where $\{A_n\}$ and $\{B_n\}$ are well-known sequences.

These problems were composed by the Committee on the Putnam Prize Competition. © The Mathematical Association of America. All rights reserved.